

THE O.P. GUPTA

ADVANCED MATH CLASSES

Mathematics (Standard & Basic)

Topic - Quadratic Equations

RTS-04



CLICK
HERE

FOR ANSWERS

RANKERS

TEST SERIES FOR X

Max. Marks - 40

Time - 90 Minutes

SECTION A

Followings multiple choice questions are of **1 Mark** each (Q01-10).

Select the correct option in each one of them.

Q01. Which one of the following is a quadratic equation?

(A) $x^2 + 2x + 1 = (4 - x)^2 + 3$

(B) $-2x^2 = (5 - x)\left(2x - \frac{5}{2}\right)$

(C) $(k+1)x^2 + \frac{3}{2}x = 7; k = -1$

(D) $2x - x^2 = (x - 1)^2$

Q02. The value of k , $k > 0$ for which the quadratic equation $2x^2 - kx - k = 0$ has equal roots, is/are

(A) 0

(B) 4

(C) 8

(D) -8

Q03. The equation $2x^2 - \sqrt{5}x + 1 = 0$ has

(A) two distinct real roots

(B) two equal real roots

(C) no real roots

(D) more than two real roots

Q04. If $x = 1$ is a common root of $ax^2 + ax + 2 = 0$ and $x^2 + x + b = 0$, then $a : b$ is equal to

(A) 1 : 2

(B) 2 : 1

(C) 1 : 4

(D) 4 : 1

Q05. If the sum of the roots of the quadratic equation $mx^2 + 6x + 4m = 0$ is equal to the product of the roots, then $m =$

(A) $-\frac{3}{2}$

(B) $\frac{3}{2}$

(C) $\frac{2}{3}$

(D) $-\frac{2}{3}$

Q06. If the sum of the roots of the equation $x^2 - x = p(2x - 1)$ is zero (0), then $p =$

(A) -2

(B) 2

(C) $\frac{1}{2}$

(D) $-\frac{1}{2}$

Q07. Which one of the following equations has two distinct real roots?

(A) $2x^2 - 3\sqrt{2}x + \frac{9}{4} = 0$

(B) $x^2 + x - 5 = 0$

(C) $x^2 + 2x + 2\sqrt{2} = 0$

(D) $5x^2 - 3x + 1 = 0$

Q08. If one root of $4x^2 - 2x + k - 4 = 0$ be the reciprocal of the other, then

(A) $k = -8$

(B) $k = 8$

(C) $k = 4$

(D) $k = -4$

Followings are **Assertion-Reason based questions** (Q09 & 10).

In the following questions, a statement of Assertion (A) is followed by a statement of Reason (R).

Choose the correct answer out of the following choices.

(A) Both A and R are true and R is the correct explanation of A.

(B) Both A and R are true and R is not the correct explanation of A.

(C) A is true but R is false.

(D) A is false but R is true.

Q09. **Assertion (A) :** The quadratic equation $ax^2 + bx + c = 0$; $a \neq 0$ will have real roots if $b^2 - 4ac \geq 0$.

Reason (R) : The expression $\sqrt{b^2 - 4ac}$ is known as the discriminant of the quadratic equation.

Q10. **Assertion (A) :** If $2 - \sqrt{3}$ is one root of the quadratic equation, then the other root will be $2 + \sqrt{3}$.

Reason (R) : Irrational roots always occur in pairs and they are conjugate of each other.

[1 × 10 = 10]

SECTION B

Followings are of **2 Marks** each (Q11-12).

Q11. (a) Solve for x : $4x^2 - 2(a^2 + b^2)x + a^2b^2 = 0$.

OR

(b) Sum of two natural numbers is 15 and sum of their reciprocals is $\frac{3}{10}$. Find the numbers.

- Q12. Find the discriminant of the quadratic equation $4x^2 - 5 = 0$, and hence comment on the nature of roots of the equation.

[2 × 2 = 4]

SECTION C

Followings are of **3 Marks** each (Q13-16).

- Q13. (a) Solve for x : $3\left(\frac{3x-1}{2x+3}\right) - 2\left(\frac{2x+3}{3x-1}\right) = 5$; $x \neq \frac{1}{3}, -\frac{3}{2}$.

OR

- (b) Solve for x : $\frac{1}{2a+b+2x} = \frac{1}{2a} + \frac{1}{b} + \frac{1}{2x}$; $x \neq 0$, $x \neq -\frac{2a+b}{2}$, $a \neq 0$, $b \neq 0$.

- Q14. A motor boat whose speed is 18 km/hr in still water takes 1 hour more to go 24 km upstream than to return downstream to the same spot. Find the speed of stream.

- Q15. A drone is hovering at the top of a vertical tower that is 20 meters high. A car is moving in a straight line toward the base of the tower. At a certain moment, the car is 80 meters away from the base. At the same moment, the drone begins to descend in a straight line to intercept the car. Assuming the drone and the car are moving at the same constant speed, at what distance from the base of the tower will the drone intercept the car?

- Q16. Find the value of p, for which one root of the quadratic equation $px^2 - 14x + 8 = 0$ is 6 times the other.

[3 × 4 = 12]

SECTION D

Followings are of **5 Marks** each (Q17-18).

- Q17. At present, Kavita's age in years is 2 more than the square of her daughter, Nisha's age. When Nisha grows to her mother's present age, Kavita's age would be 1 year less than 10 times the present age of Nisha. Find the present ages of both Nisha and Kavita.

- Q18. (a) If the equation $(1+t^2)x^2 + (2tc)x + (c^2 - a^2) = 0$ has equal roots, prove that $c^2 = a^2(1+t^2)$.

OR

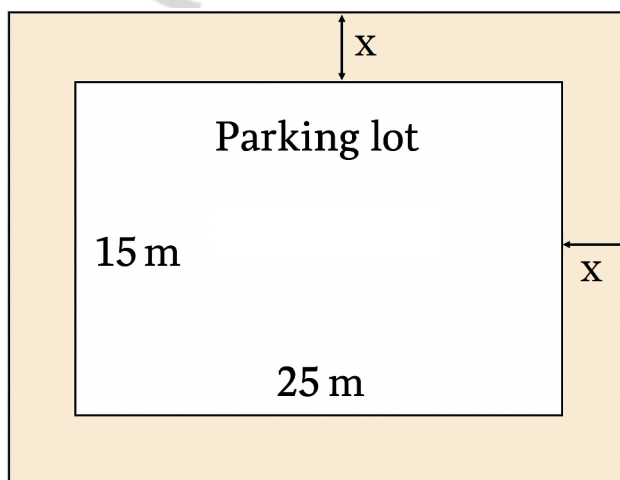
- (b) A garden designer is creating a mosaic pattern using two different square tiles made of colored glass. The total area available for tiling is 400 cm^2 , and the tiles are square in shape but of different sizes. To give a visually appealing border effect, the designer wants the difference in the perimeters of the two square tiles to be exactly 16 cm. She wants to know the dimensions of each square tile so that this condition is satisfied while completely utilizing the 400 cm^2 of glass available. Frame a quadratic equation to find the required dimensions and hence determine the dimensions also.

[5 × 2 = 10]

SECTION E

Following is a case-study based question of **4 Marks** (Q19); having three sub-parts (i), (ii) and (iii).

- Q19. A school plans to construct a rectangular parking lot measuring 25 meters in length and 15 meters in width. Around the parking lot, a path of uniform width x meters is to be constructed on all four sides, such that the total area (parking lot + path) becomes 551 square meters.



On the basis of the above information, answer the following questions.

- (i) Write an expression for the total area (including the path) in terms of x , the width of the path.
- (ii) Form a quadratic equation in x , based on the total area 551 square meters.
- (iii) (a) Solve the quadratic equation obtained in sub-part (ii) to find the width of the path.

OR

- (b) If the width of the path were increased by 1 meter, what would the new total area be?

$$[1+1+2=4]$$

① SHARE THIS FILE with all other math scholars.

① You may Add our mobile no. +919650350480 to your WhatsApp Groups for regular updates.

① MS Word files of MCQ Tests / Subjective Tests / Case-Study Questions are available for SALE.

CLASS 10
Standard & Basic
Aligned with NEP 2020 & NCSE 2023
BASED ON NCERT TEXTBOOK & LATEST CBSE SYLLABUS FOR 2023-2026
MATHMISSION
POWERED BY AI
COMPLETE THEORY WITH EXERCISES
SUBJECTIVE TYPE QUESTIONS
COMPETENCY FOCUSED QUESTIONS
MULTIPLE CHOICE QUESTIONS
ASSERTION-REASON QUESTIONS
CASE-STUDY & PROJECT BASED QUESTIONS
O.P. GUPTA
INDIRA AWARD WINNER

GET BULK-ORDERS @ THE DISCOUNTED PRICES FOR SCHOOLS, TUITIONS & COACHING INSTITUTES
Available also on **amazon** and **Flipkart**

MOST REPUTED REFRESHER BOOK OF MATHS FOR X
Order your copy now @ Discounted Rates only on WhatsApp @ +91-9650350480

Class 10
Standard & Basic
FOR CBSE EXAMS Session 2025-26
SOLUTIONS OF MATHMISSION
TRUSTED BY TEACHERS & TOPPERS
O.P. GUPTA
INDIRA AWARD WINNER

We have released Set of 2 Books for CBSE X Maths (Standard & Basic) useful for 2025-26.

1. MATHMISSION FOR X

- ✓ COMPLETE THEORY & EXAMPLES
- ✓ SUBJECTIVE TYPE QUESTIONS
- ✓ COMPETENCY FOCUSED QUESTIONS
 - ✦ Multiple Choice Questions
 - ✦ Assertion-Reason Questions
 - ✦ Case-Study / Passage Based Questions
- ✓ Selected Questions from recent exams.
- ✓ Answers of all the Questions of Exercises

2. SOLUTIONS OF MATHMISSION

- ✓ Step-by-step Detailed Solutions (For all the Exercises of MATHMISSION)

Grab the best Seller book for X, XI & XII Maths (041) CBSE Exams.

- ✓ **MATHMISSION FOR XII, XI & X**
(Refresher Guide with Competency Focused Questions)

✦ The books are developed as per CBSE Curriculum for 2025-26.

- ✓ **CBSE 21 SAMPLE PAPERS FOR XII**
- ✓ **CBSE YODDHA SAMPLE PAPERS FOR XI**
- ✓ **CBSE UMANG SAMPLE PAPERS FOR X**

(Order now at Discounted rate on WhatsApp - 9650350480)



Scan QR-Code to Visit Amazon Store

MATHEMATICIA BY O.P. GUPTA

...a name you can bank upon!



Feel Safe to **Share this Document** with other math scholars

CLICK NOW

TO

Download



or, just type -
theopgupta.com

**FREE PDF TESTS AND
ASSIGNMENTS OF THE
CLASSES XII, XI & X**



To get **FREE PDF Materials**, join
WhatsApp Teachers Group
by Clicking on the Logo

Click on the
Book cover
to buy!





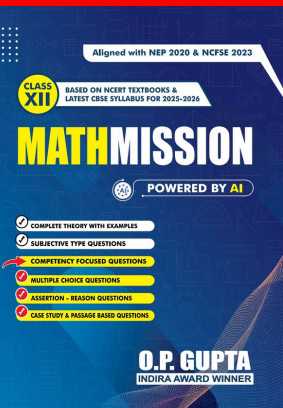
If you are a **Student**, then you may
join our **Students Group**

CLICK HERE FOR
**CLASSES
IX & X**

CLICK HERE FOR
**CLASSES
XI & XII**

You can add our WhatsApp no. **+919650350480** to your Groups also

Many **Direct Questions** from our Books have been asked in the recent CBSE Exams



**MATHMISSION
FOR XII, XI & X**
2025-26 Edition

Buy our
books on
amazon
Flipkart

/theopgupta /theopgupta /theopgupta /@theopgupta

For Bulk Orders of our Books at Discounted Price, contact on +91-9650350480